



INDIAN SCHOOL AL WADI AL KABIR

DEPARTMENT OF MATHEMATICS (2025-2026)

TOPIC: ADDITION

REVISION WORKSHEET

RESOURCE PERSON: Ms. Veda Vijay

NAME: _____ CLASS: III SEC: _____ DATE: _____


Read the instructions and do as directed.

I. Fill in the blanks.

- a. In the addition sentence, $300+25 = 325$, the sum is _____, while 300 and 25 are the _____.
- b. The sum of 2300 and 100 is equal to _____.
- c. $8459 + \underline{\hspace{2cm}} = 8460$
- d. $\underline{\hspace{2cm}} + 0 = 5430$
- e. Adding 1 to 4999 gives _____ as the answer.
- f. $2341 + 6410 = \underline{\hspace{2cm}} + 2341$

II. Read the question carefully and add the following numbers.

- a. In the Champions Cricket Trophy, the scores of the India v/s New Zealand match for two innings are given below. Find the total scores of each team and decide who won the match.



New Zealand

	H	T	O
	2	0	8
+	2	4	3

India

	H	T	O
	2	2	5
+	2	2	7

Ans: _____ won the match.

b. Reena is out for her kitchen shopping. She wants to buy only two items today. Can you help her to find the total amount that she needs to pay?



₹1245



₹1723



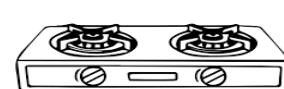
₹3500





₹2433







₹5500





₹ 2416

	Th	H	T	O	
	1	2	4	5	
+	1	7	2	3	
₹					

	Th	H	T	O	
	3	5	0	0	
+	2	4	3	3	
₹					

	Th	H	T	O	
	5	5	0	0	
+	2	4	1	6	
₹					

	Th	H	T	O	
					
+					
₹					

III. Solve the following story sums.

- a. The school organized a charity event where they collected 192 food items and 218 clothing items. What is the total number of items collected?

Ans:	

- b. At a bakery, the baker baked 480 cookies in the morning and another 360 cookies in the afternoon. How many cookies did he bake in total for the day?

Ans:	